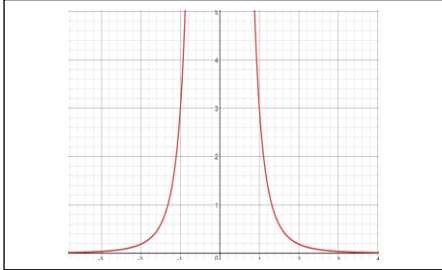


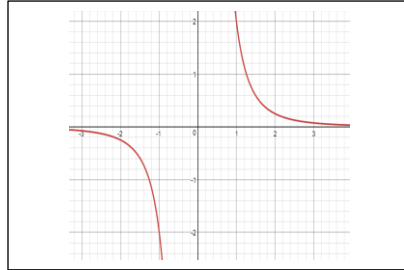
مدرسة الراشد الصالح الخاصة

ورقة عمل تقويمية

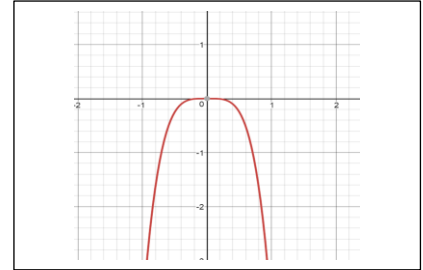
طابقي التمثيل البياني بالدالة المناسبة في كل صف دون استخدام الآلة الحاسبة .



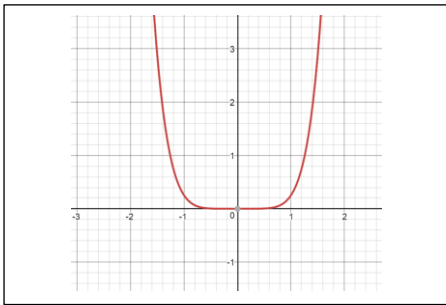
$$f(x) = 2x^{-3}$$



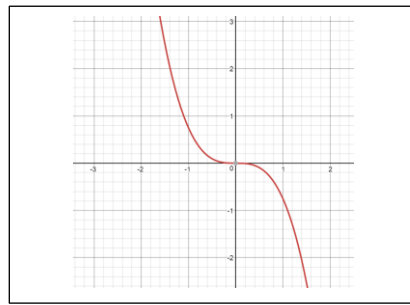
$$f(x) = -4x^4$$



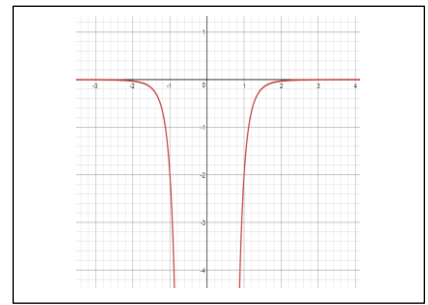
$$f(x) = 3x^{-4}$$



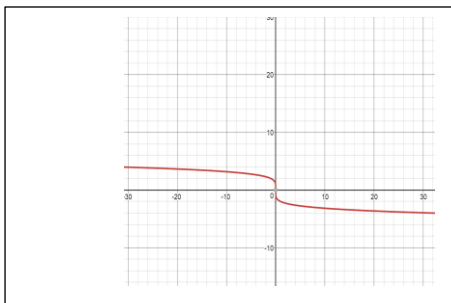
$$f(x) = -2x^{-6}$$



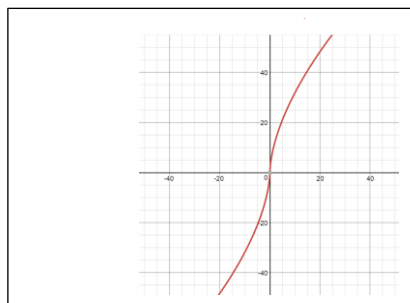
$$f(x) = \frac{1}{4}x^6$$



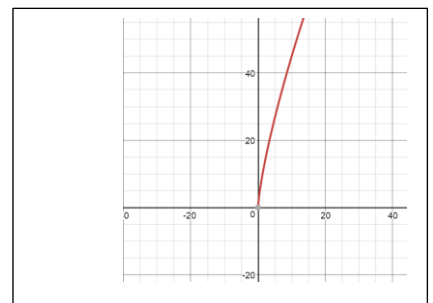
$$f(x) = -\frac{3}{4}x^3$$



$$f(x) = -2x^{\frac{1}{5}}$$



$$f(x) = 8x^{\frac{3}{4}}$$



$$f(x) = 8x^{\frac{3}{5}}$$